

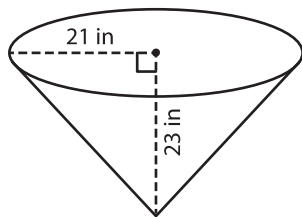
Name : _____

Volume - Cone

Integers: ES5

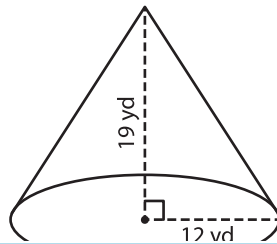
A) Find the volume of each cone. Round your answer to two decimal places.
(use $\pi = 3.14$)

1)



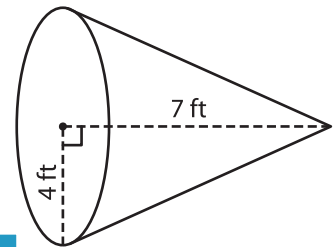
Volume = _____

2)



Volume = _____

3)



Volume = _____

B) Find the volume of each cone. Round your answer to two decimal places.

4) height = 6 yd ; radius = 10 yd

Volume = _____

6) radius = 28 ft ; height = 12 ft

Volume = _____

PREVIEW
Gain complete access to the largest
collection of worksheets in all subjects!

Members, please
log in to
download this
worksheet.

Not a member?
Please sign up to
gain complete
access.

www.mathworksheets4kids.com

Volume = _____

8) A conical paperweight has a height and radius of 4 inches and 1 inch respectively. Find the volume of the paperweight. Round your answer to two decimal places. (use $\pi = 3.14$)
