

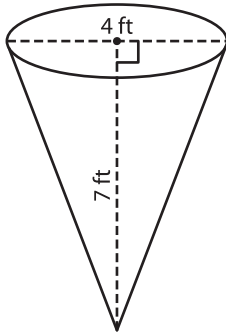
Name : _____

Volume - Cone

Integers: MS2

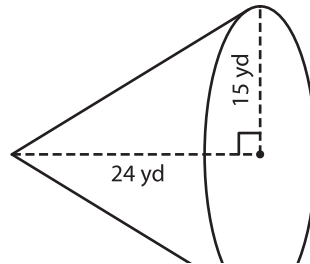
A) Find the volume of each cone. Round your answer to two decimal places.
(use $\pi = 3.14$)

1)



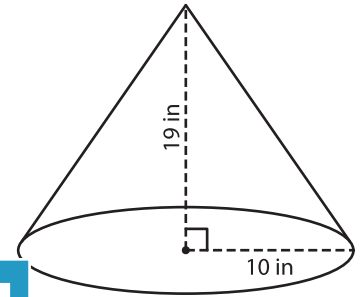
Volume = _____

2)



Volume = _____

3)



Volume = _____

B) Find the volume of each cone. Round your answer to two decimal places.

4) diameter = 27 in ; height = 10 in

Volume = _____

6) height = 14 ft ; diameter = 10 ft

Volume = _____

PREVIEW
Gain complete access to the largest collection of worksheets in all subjects!

Members, please log in to download this worksheet.

Not a member? Please sign up to gain complete access.

www.mathworksheets4kids.com

5) Round your answer to two decimal places.

diameter = 13 ft ; height = 10 ft

Volume = _____

height = 9 yd ; diameter = 10 yd

Volume = _____

8) Mrs. Bennet brings a wooden cone to the geometry class. The height and diameter of the cone are both 3 inches. She asks us to find the volume of the cone. What is our answer? Round your answer to two decimal places. (use $\pi = 3.14$)
