

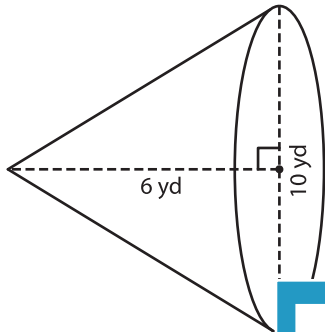
Name : _____

Volume - Cone

Integers: MS3

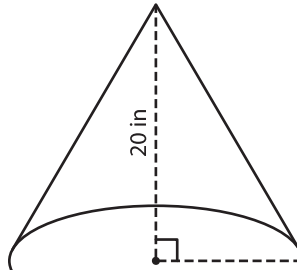
A) Find the volume of each cone. Round your answer to two decimal places.
(use $\pi = 3.14$)

1)



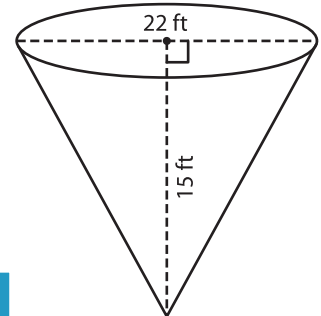
Volume = _____

2)



Volume = _____

3)



Volume = _____

B) Find the volume of each cone. Round your answer to two decimal places.

4) height = 9 yd ; diameter = 12 yd

Volume = _____

6) height = 10 in ; radius = 4 in

Volume = _____

Gain complete access to the largest collection of worksheets in all subjects!

Members, please log in to download this worksheet.

Not a member? Please sign up to gain complete access.

www.mathworksheets4kids.com

5) height = 26 in ; radius = 10 in

Volume = _____

height = 17 ft ; radius = 5 ft

Volume = _____

8) Little Natalie makes a conical Christmas tree, using green clay. If the height of the tree is 4 inches, and the diameter of the base is 3 inches, how much clay is in use? (use $\pi = 3.14$)

