

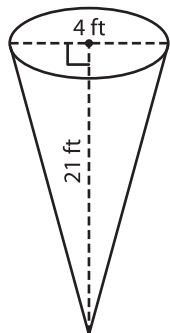
Name : _____

Volume - Cone

Integers: MS6

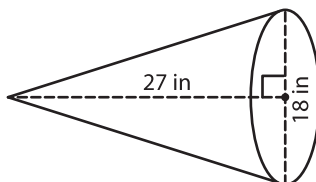
A) Find the volume of each cone. Round your answer to two decimal places.
(use $\pi = 3.14$)

1)



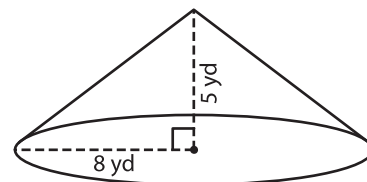
Volume = _____

2)



Volume = _____

3)



Volume = _____

B) Find the volume of each cone. Round your answer to two decimal places.

4) height = 23 in ; diameter = 10 in

Volume = _____

6) diameter = 7 ft ; height = 12 ft

Volume = _____

Gain complete access to the largest collection of worksheets in all subjects!

Members, please log in to download this worksheet.

Not a member? Please sign up to gain complete access.

www.mathworksheets4kids.com

5) Round your answer to two decimal places.

7) height = 27 yd ; radius = 10 yd

Volume = _____

8) A cone-shaped party popper has a height and diameter of 3 inches and 1 inch respectively. Find its volume. Round your answer to two decimal places.
(use $\pi = 3.14$)

