

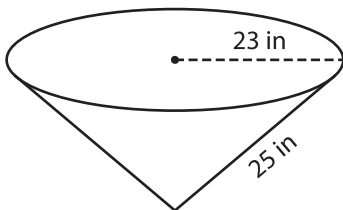
Name : \_\_\_\_\_

## Volume - Cone

Sheet 1

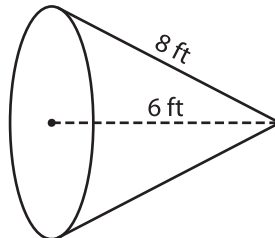
A) Find the volume of each cone. Round your answer to two decimal places.  
(use  $\pi = 3.14$ )

1)



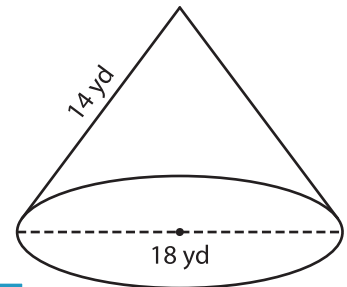
Volume = \_\_\_\_\_

2)



Volume = \_\_\_\_\_

3)



Volume = \_\_\_\_\_

B) Find the volume of each cone. Round your answer to two decimal places.

4) slant height = 23 in ; radius = 12 in

Volume = \_\_\_\_\_

6) diameter = 22 yd ; slant height = 21 ft

Volume = \_\_\_\_\_

Volume = \_\_\_\_\_

# PREVIEW

Gain complete access to the largest collection of worksheets in all subjects!

Members, please log in to download this worksheet.

Not a member? Please sign up to gain complete access.

www.mathworksheets4kids.com

Volume = \_\_\_\_\_

Volume = \_\_\_\_\_

8) The height and slant height of a steel cone are 10 inches and 15 inches respectively. What is the volume of the cone? Round your answer to two decimal places. (use  $\pi = 3.14$ )

