

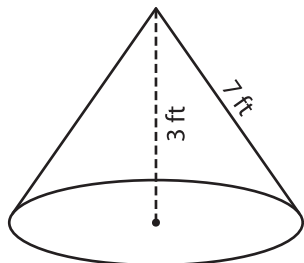
Name : _____

Volume - Cone

Sheet 2

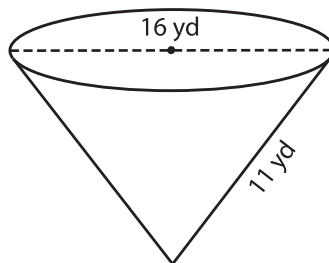
A) Find the volume of each cone. Round your answer to two decimal places.
(use $\pi = 3.14$)

1)



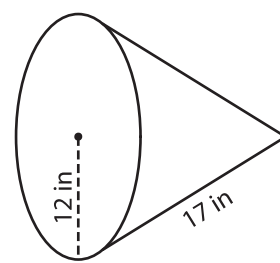
Volume = _____

2)



Volume = _____

3)



Volume = _____

B) Find the volume of each cone. Round your answer to two decimal places.

4) height = 6 ft ; slant height = 10 ft

Volume = _____

6) radius = 5 in ; slant height = 13 in

Volume = _____

PREVIEW

Gain complete access to the largest collection of worksheets in all subjects!

Members, please log in to download this worksheet.

Not a member? Please sign up to gain complete access.

www.mathworksheets4kids.com

5) Round your answer to two decimal places.

7) radius = 10 ft ; slant height = 27 yd

Volume = _____

8) radius = 10 ft ; height = 25 ft

Volume = _____

8) A conical candle mold has a radius of 2 inches. If the slant height of the mold is 8 inches, find the volume of the mold. Round your answer to two decimal places. (use $\pi = 3.14$)
