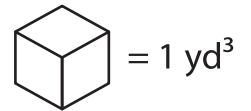


Name : _____

Volume - Counting Cubes


Sheet 2

Draw the shapes for the given dimensions and find the volume.



1) $l = 8 \text{ yd}, w = 2 \text{ yd}, h = 1 \text{ yd}$



2) $l = 3 \text{ yd}, w = 2 \text{ yd}, h = 2 \text{ yd}$



Volume = _____

3) $l = 1 \text{ yd}, w = 1 \text{ yd},$



$h = 3 \text{ yd}$



Volume = _____

5) $l = 7 \text{ yd}, w = 3 \text{ yd},$

$h = 3 \text{ yd}$



Volume = _____

Volume = _____

PREVIEW

Gain complete access to the largest collection of worksheets in all subjects!

Members, please log in to download this worksheet.

Not a member? Please sign up to gain complete access.

www.mathworksheets4kids.com