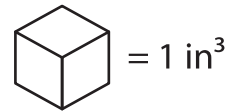


Name : \_\_\_\_\_

## Volume - Counting Cubes



Sheet 3

Draw the shapes for the given dimensions and find the volume.



1)  $l = 5 \text{ in}, w = 5 \text{ in}, h = 2 \text{ in}$



2)  $l = 2 \text{ in}, w = 2 \text{ in}, h = 2 \text{ in}$



Volume = \_\_\_\_\_

3)  $l = 3 \text{ in}, w = 2 \text{ in}, h = 1 \text{ in}$



$l = 3 \text{ in}, w = 2 \text{ in}, h = 1 \text{ in}$



Volume = \_\_\_\_\_

5)  $l = 3 \text{ in}, w = 1 \text{ in}, h = 2 \text{ in}$

$l = 3 \text{ in}, w = 1 \text{ in}, h = 2 \text{ in}$



Volume = \_\_\_\_\_

Volume = \_\_\_\_\_

**PREVIEW**

Gain complete access to the largest collection of worksheets in all subjects!

Members, please log in to download this worksheet.

Not a member? Please sign up to gain complete access.

[www.mathworksheets4kids.com](http://www.mathworksheets4kids.com)