




Name : \_\_\_\_\_

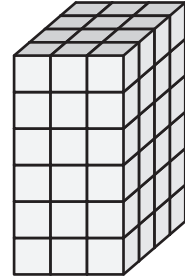
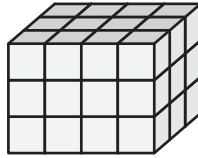
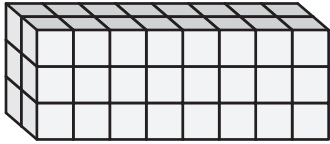
# Counting Cubes - Rectangular Prisms

Count the cubes and find the volume of each rectangular prism.

1)  = 6 in<sup>3</sup>


2)  = 4 ft<sup>3</sup>


3)  = 9 yd<sup>3</sup>




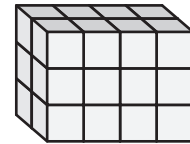
Volume = \_\_\_\_\_

Volume = \_\_\_\_\_

4)  = 2 yd<sup>3</sup>





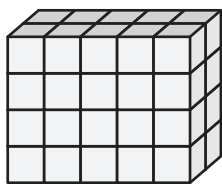
 = 3 ft<sup>3</sup>





Volume = \_\_\_\_\_

Volume = \_\_\_\_\_

7)  = 8 ft<sup>3</sup>



 = 1 in<sup>3</sup>



Volume = \_\_\_\_\_

Volume = \_\_\_\_\_

Volume = \_\_\_\_\_

**PREVIEW**

Gain complete access to the largest collection of worksheets in all subjects!

Members, please log in to download this worksheet.

Not a member? Please sign up to gain complete access.

[www.mathworksheets4kids.com](http://www.mathworksheets4kids.com)