



Name : _____


Counting Cubes - Solid Blocks

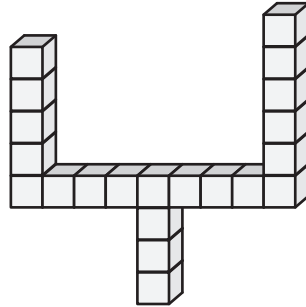
Count the cubes and find the volume of each solid block.

1)  = 8 yd³



Volume = _____

2)  = 9 in³




PREVIEW

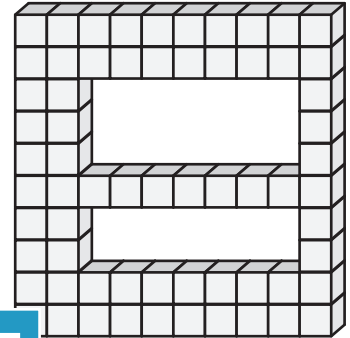
Gain complete access to the largest collection of worksheets in all subjects!

Members, please log in to download this worksheet.


Not a member? Please sign up to gain complete access.

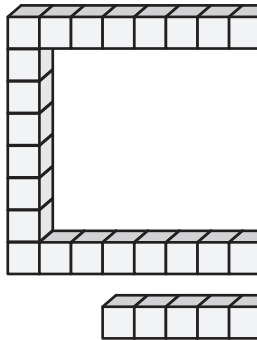
www.mathworksheets4kids.com

3)  = 3 ft³





Volume = _____

4)  = 4 in³




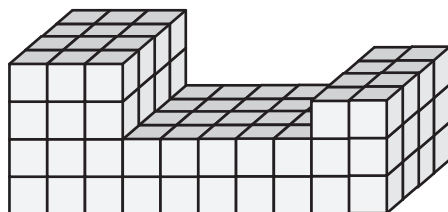
Volume = _____

5)  = 9 yd³

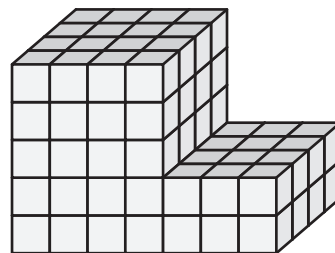


Volume = _____


7)  = 2 ft³

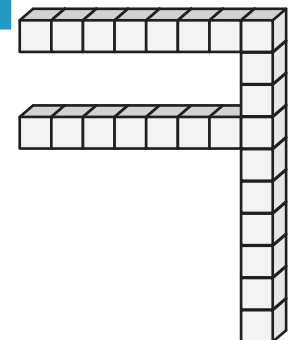


Volume = _____



Volume = _____

6)  = 6 in³



Volume = _____