

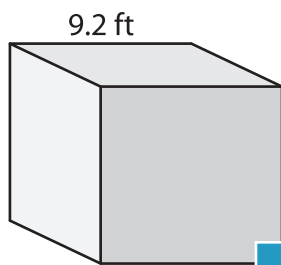
Name : _____

Volume - Cube

Sheet 2

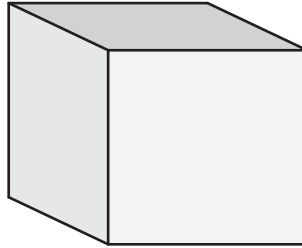
A) Find the volume of each cube. Round your answer to two decimal places.

1)



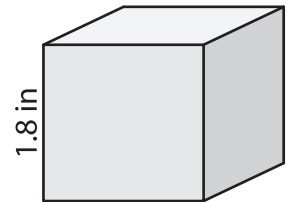
Volume = _____

2)



Volume = _____

3)



B) Find the volume of each cube. Round your answer to two decimal places.

4) side length = 8.5 ft

Volume = _____

6) side length = 6.1 in

Volume = _____

Volume = _____

PREVIEW

Gain complete access to the largest collection of worksheets in all subjects!

Members, please log in to download this worksheet.

Not a member? Please sign up to gain complete access.

www.mathworksheets4kids.com

8) If the depth of a cubical candle mold is 2.7 inches, find the volume of the mold. Round your answer to two decimal places.
