

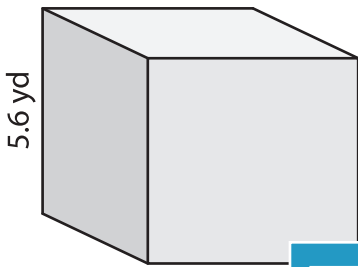
Name : _____

Volume - Cube

Sheet 3

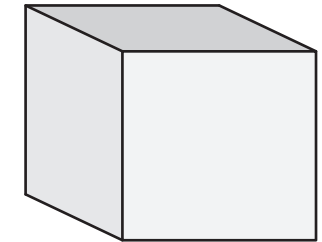
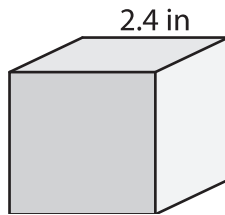
A) Find the volume of each cube. Round your answer to two decimal places.

1)



Volume = _____

2)



Volume = _____

B) Find the volume of each cube. Round your answer to two decimal places.

4) side length = 6.5 yd

Volume = _____

6) side length = 3.3 ft

Volume = _____

Gain complete access to the largest collection of worksheets in all subjects!

Members, please log in to download this worksheet.

Not a member? Please sign up to gain complete access.

www.mathworksheets4kids.com

Volume = _____

8) Find the volume of the paper weight. Round your answer to two decimal places.

