

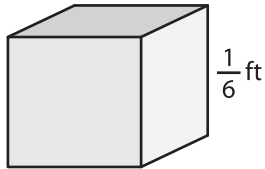
Name : \_\_\_\_\_

## Volume - Cube

Sheet 1

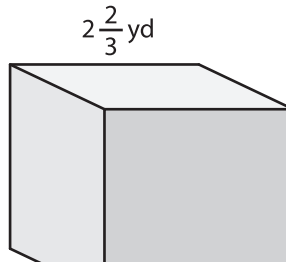
A) Find the volume of each cube.

1)



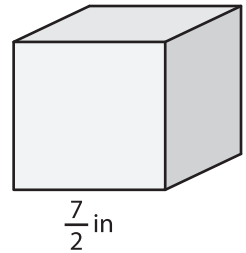
Volume = \_\_\_\_\_

2)



Volume = \_\_\_\_\_

3)



B) Find the volume of each cube.

4) side length =  $\frac{4}{9}$  ft

Volume = \_\_\_\_\_

6) side length =  $\frac{5}{7}$  in

Volume = \_\_\_\_\_

**PREVIEW**  
Gain complete access to the largest  
collection of worksheets in all subjects!

Members, please  
log in to  
download this  
worksheet.

Not a member?  
Please sign up to  
gain complete  
access.

[www.mathworksheets4kids.com](http://www.mathworksheets4kids.com)

side length =  $\frac{6}{5}$  yd

Volume = \_\_\_\_\_

side length =  $1\frac{1}{8}$  ft

Volume = \_\_\_\_\_

8) If a side of an ice cube measures  $1\frac{2}{3}$  inches, what is the total volume of 9 such ice cubes?

\_\_\_\_\_