

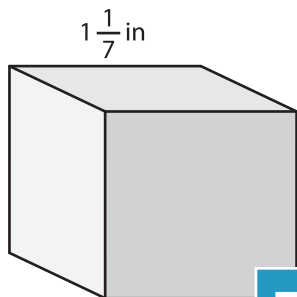
Name : _____

Volume - Cube

Sheet 3

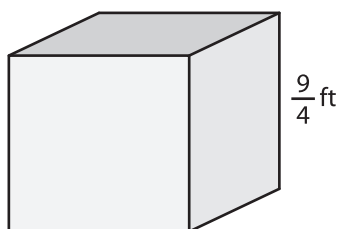
A) Find the volume of each cube.

1)



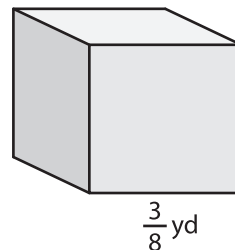
Volume = _____

2)



Volume = _____

3)



Volume = _____

B) Find the volume of each cube.

4) side length = $\frac{5}{6}$ in

Volume = _____

6) side length = $2\frac{1}{3}$ yd

Volume = _____

PREVIEW
Gain complete access to the largest
collection of worksheets in all subjects!

Members, please
log in to
download this
worksheet.

Not a member?
Please sign up to
gain complete
access.

www.mathworksheets4kids.com

side length = $\frac{1}{9}$ ft

Volume = _____

side length = $\frac{9}{5}$ in

Volume = _____

8) Shawn pieces a large cube together from 25 metal cubes. The side length of each metal cube is $\frac{3}{5}$ inches. Find the volume of the large cube thus formed.
