

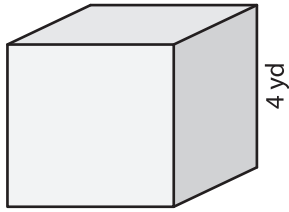
Name : _____

Volume - Cube

ES3

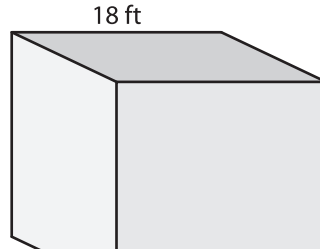
A) Find the volume of each cube.

1)



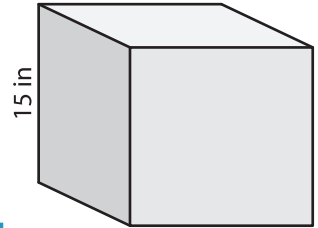
Volume = _____

2)



Volume = _____

3)



B) Find the volume of each cube.

4) side length = 5 yd

Volume = _____

6) side length = 12 ft

Volume = _____

Volume = _____

PREVIEW
Gain complete access to the largest
collection of worksheets in all subjects!

Members, please
log in to
download this
worksheet.

Not a member?
Please sign up to
gain complete
access.

www.mathworksheets4kids.com

8) A cubical locker has a side length of 8 inches. How much space does the locker have?
