

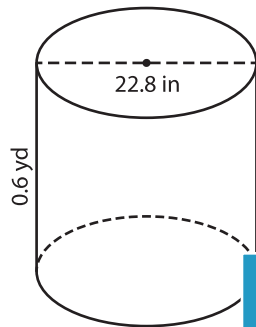
Name : _____

Volume - Cylinder

Decimals: DS4

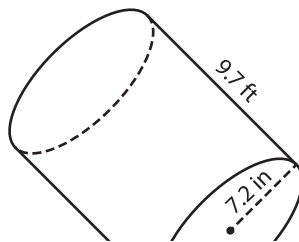
A) Find the volume of each cylinder. Round your answer to two decimal places.
(use $\pi = 3.14$)

1)



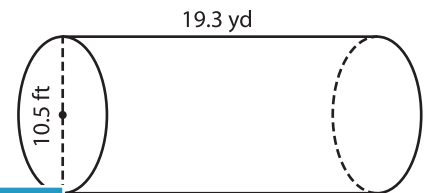
Volume = _____

2)



Volume = _____

3)



Volume = _____ yd³

B) Find the volume of each cylinder. Round your answer to two decimal places.

4) height = 17.5 in ; diameter = 10.5 in

Volume = _____

6) diameter = 12.3 in ; height = 1.5 ft

Volume = _____ in³

PREVIEW
Gain complete access to the largest collection of worksheets in all subjects!

Members, please log in to download this worksheet.

Not a member? Please sign up to gain complete access.

www.mathworksheets4kids.com

Volume = _____ ft³

8) A cylindrical pipe is 2.4 inches in diameter and 1.6 feet in height. Find the volume of the pipe. Round your answer to two decimal places.(use $\pi = 3.14$)

_____ cubic feet