

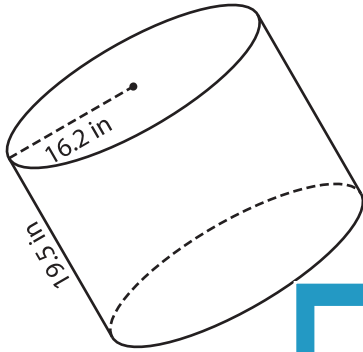
Name : _____

Decimals: ES3

Volume - Cylinder

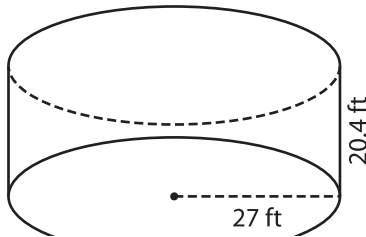
A) Find the volume of each cylinder. Round your answer to two decimal places.
(use $\pi = 3.14$)

1)



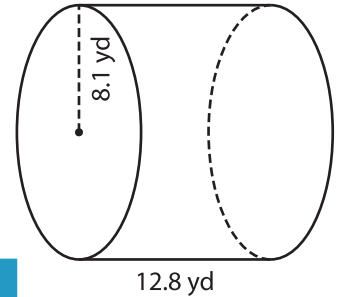
Volume = _____

2)



Volume = _____

3)



Volume = _____

B) Find the volume of each cylinder. Round your answer to two decimal places.

4) radius = 18.3 yd ; height = 12.5 yd

Volume = _____

6) height = 24 in ; radius = 10 in

Volume = _____

PREVIEW
Gain complete access to the largest collection of worksheets in all subjects!

Members, please log in to download this worksheet.

Not a member? Please sign up to gain complete access.

www.mathworksheets4kids.com

5) radius = 2.4 in ; height = 15.1 ft

Volume = _____

Volume = _____

8) The height of a pillar candle is 6 inches. The radius is 1.5 inches. What is the volume of the candle? (use $\pi = 3.14$)
