

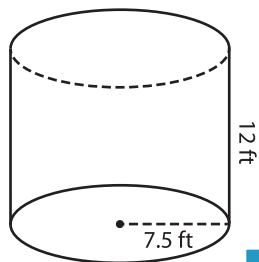
Name : _____

Decimals: ES4

Volume - Cylinder

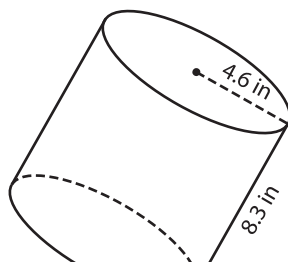
A) Find the volume of each cylinder. Round your answer to two decimal places.
(use $\pi = 3.14$)

1)



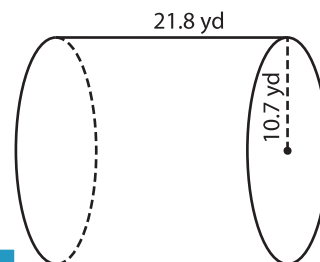
Volume = _____

2)



Volume = _____

3)



B) Find the volume of each cylinder. Round your answer to two decimal places.

4) radius = 5.8 in ; height = 10.2 in

Volume = _____

6) height = 22.3 yd ; radius = 13.5 ft

Volume = _____

PREVIEW
Gain complete access to the largest collection of worksheets in all subjects!

Members, please log in to download this worksheet.

Not a member? Please sign up to gain complete access.

www.mathworksheets4kids.com

8) Dan has a paint tin of height 25 inches and diameter 13.1 inches. How much paint does the tin contain when full to its capacity? Round your answer to two decimal places.
(use $\pi = 3.14$)