

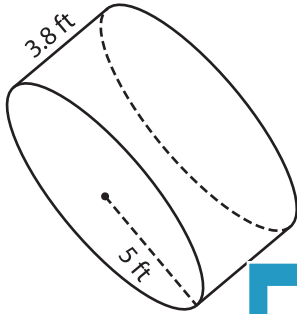
Name : \_\_\_\_\_

## Volume - Cylinder

Decimals: MS2

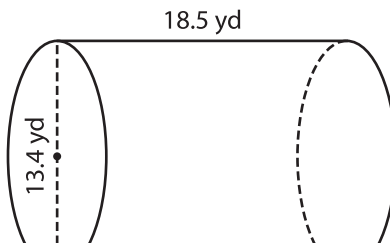
A) Find the volume of each cylinder. Round your answer to two decimal places. (use  $\pi = 3.14$ )

1)



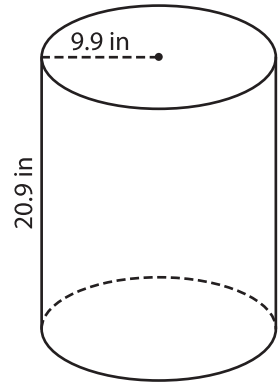
Volume = \_\_\_\_\_

2)



Volume = \_\_\_\_\_

3)



Volume = \_\_\_\_\_

B) Find the volume of each cylinder. Round your answer to two decimal places.

4) diameter = 8.2 ft ; height = 6 yd

Volume = \_\_\_\_\_

6) height = 22.3 in ; radius = 11.8 in

Volume = \_\_\_\_\_

**PREVIEW**

Gain complete access to the largest collection of worksheets in all subjects!

Members, please log in to download this worksheet.

Not a member? Please sign up to gain complete access.

[www.mathworksheets4kids.com](http://www.mathworksheets4kids.com)

Volume = \_\_\_\_\_

8) An alkaline battery measures 1.9 inches in height and 1 inch in diameter. What is the volume of the battery? Round your answer to two decimal places. (use  $\pi = 3.14$ )

\_\_\_\_\_