

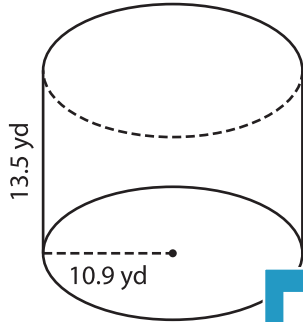
Name : \_\_\_\_\_

## Volume - Cylinder

Decimals: MS3

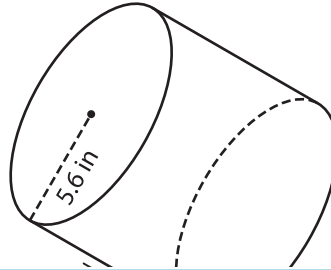
A) Find the volume of each cylinder. Round your answer to two decimal places.  
(use  $\pi = 3.14$ )

1)



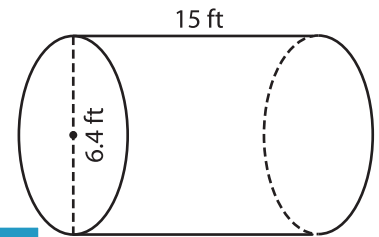
Volume = \_\_\_\_\_

2)



Volume = \_\_\_\_\_

3)



B) Find the volume of each cylinder. Round your answer to two decimal places.

4) radius = 11 yd ; height = 15 yd

Volume = \_\_\_\_\_

6) diameter = 8.6 ft ; height = 12 ft

Volume = \_\_\_\_\_

**PREVIEW**  
Gain complete access to the largest collection of worksheets in all subjects!

Members, please log in to download this worksheet.

Not a member? Please sign up to gain complete access.

[www.mathworksheets4kids.com](http://www.mathworksheets4kids.com)

Volume = \_\_\_\_\_

8) A wood log has a length of 12 inches and diameter of 4.5 inches. What is the volume of the log? Round your answer to two decimal places. (use  $\pi = 3.14$ )

\_\_\_\_\_