

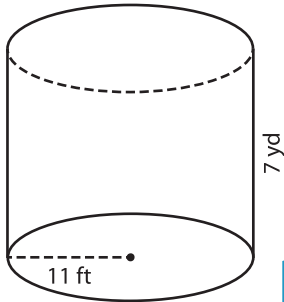
Name : _____

Integers: DS3

Volume - Cylinder

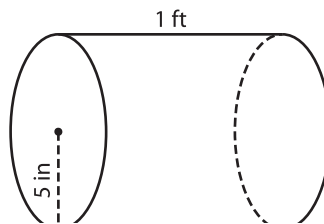
A) Find the volume of each cylinder. Round your answer to two decimal places. (use $\pi = 3.14$)

1)



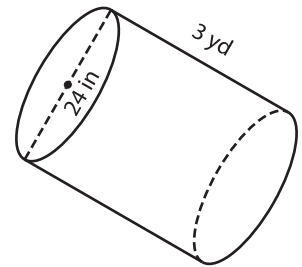
Volume = _____

2)



Volume = _____

3)



Volume = _____ yd³

B) Find the volume of each cylinder. Round your answer to two decimal places.

4) diameter = 30 in ; height = 10 in

Gain complete access to the largest collection of worksheets in all subjects!

Members, please log in to download this worksheet.

Not a member? Please sign up to gain complete access.

www.mathworksheets4kids.com

5) diameter = 26 ft ; height = 10 ft

6) diameter = 26 ft ; height = 15 in

Volume = _____ ft³

Volume = _____ in³

Volume = _____ yd³

Volume = _____ in³

8) Find the volume of the cylindrical container, if its height is 1 foot and the radius 2 inches? Round your answer to two decimal places. (use $\pi = 3.14$)

_____ cubic inches