

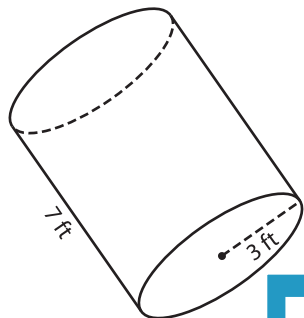
Name : _____

Volume - Cylinder

Integers: ES5

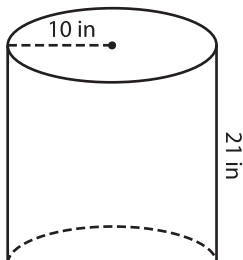
A) Find the volume of each cylinder. (use $\pi = 3.14$)

1)



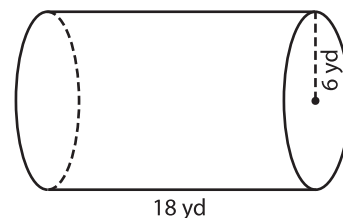
Volume = _____

2)



Volume = _____

3)



Volume = _____

B) Find the volume of each cylinder.

Gain complete access to the largest collection of worksheets in all subjects!

(use $\pi = 3.14$)

4) radius = 13 in ; height = 10 in

radius = 4 ft

Volume = _____

6) height = 24 yd ; radius = 5 yd

height = 19 in

Volume = _____

Volume = _____

8) A tennis ball saver has a radius of 2 inches and height 8 inches. What is the volume of the ball saver? (use $\pi = 3.14$)
