

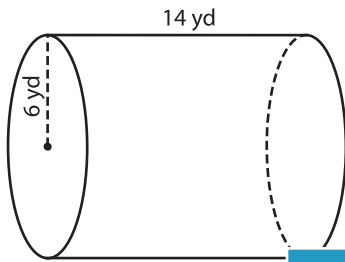
Name : _____

Volume - Cylinder

Integers: ES6

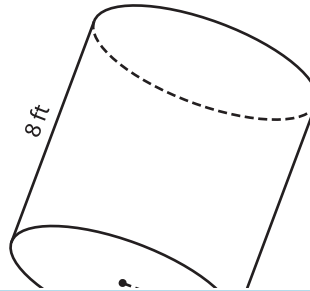
A) Find the volume of each cylinder. (use $\pi = 3.14$)

1)



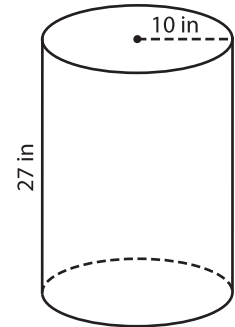
Volume = _____

2)



Volume = _____

3)



B) Find the volume of each cylinder. (use $\pi = 3.14$)

4) height = 3 ft ; radius = 7 ft

radius = 7 yd

Volume = _____

6) radius = 17 in ; height = 20 ft

height = 20 ft

Volume = _____

Volume = _____

8) A cylindrical cake pan has a radius of 4 inches and depth of 2 inches. Find the volume of the pan. (use $\pi = 3.14$)

PREVIEW

Gain complete access to the largest collection of worksheets in all subjects!

Members, please log in to download this worksheet.

Not a member? Please sign up to gain complete access.

www.mathworksheets4kids.com