

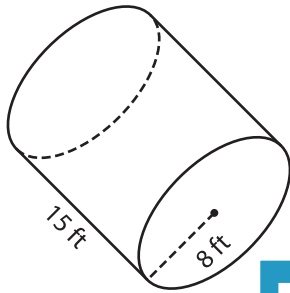
Name : _____

Volume - Cylinder

Integers: MS5

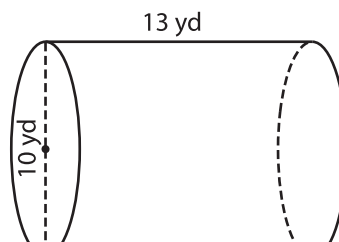
A) Find the volume of each cylinder. (use $\pi = 3.14$)

1)



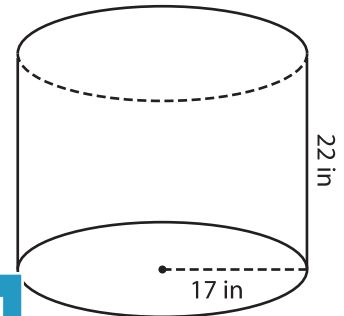
Volume = _____

2)



Volume = _____

3)



Volume = _____

B) Find the volume of each cylinder. (use $\pi = 3.14$)

4) height = 16 ft ; radius = 5 ft

Volume = _____

6) radius = 19 in ; height = 14 in

Volume = _____

5) radius = 14 yd ; height = 14 yd

Volume = _____

7) radius = 6 in ; height = 6 in

Volume = _____

Gain complete access to the largest collection of worksheets in all subjects!

Members, please log in to download this worksheet.

Not a member? Please sign up to gain complete access.

www.mathworksheets4kids.com

8) An oil drum is half-filled with crude oil. The diameter of the drum is 22 inches and the height 33 inches. What is the volume of the part of the drum containing oil? (use $\pi = 3.14$)
