

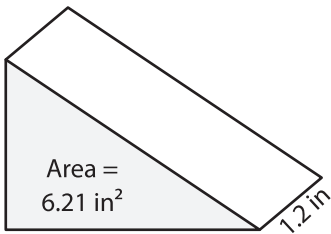
Name: _____

Volume - Prism

Decimals: S1

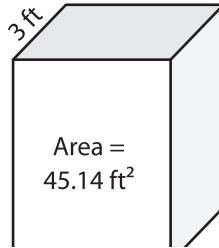
Find the volume of each shape. Round your answer to two decimal places.

1)

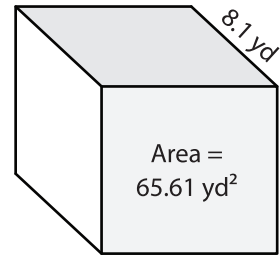


Volume = _____

2)

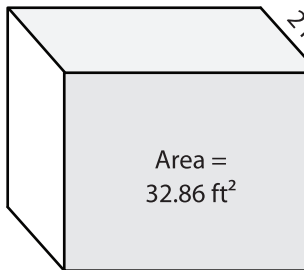


3)



Volume = _____

4)



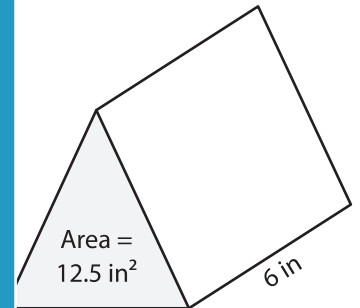
Volume = _____

PREVIEW
Gain complete access to the largest collection of worksheets in all subjects!

Members, please log in to download this worksheet.

Not a member? Please sign up to gain complete access.

www.mathworksheets4kids.com



Volume = _____

7) The height of a square prism is 4.5 feet. The area of the base is 16 square feet. What is its volume?

_____ is its volume?

8) Find the volume of the triangular prism with a base area of 84.2 square yards and a height of 8.3 yards.