

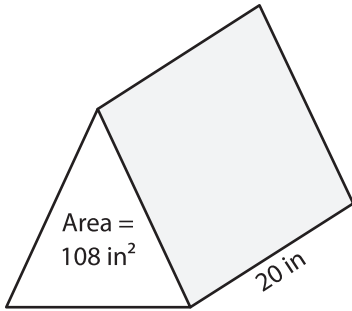
Name: \_\_\_\_\_

## Volume - Prism

Integers: 51

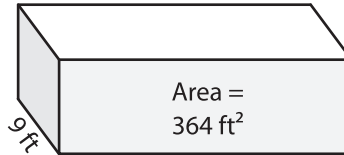
Find the volume of each shape.

1)



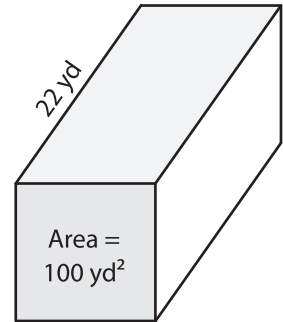
Volume = \_\_\_\_\_

2)



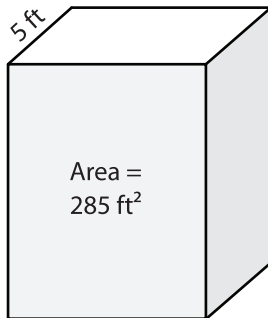
Volume = \_\_\_\_\_

3)



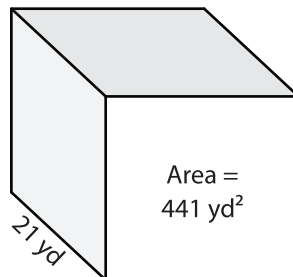
Volume = \_\_\_\_\_

4)



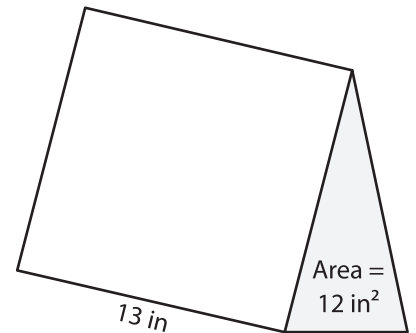
Volume = \_\_\_\_\_

5)



Volume = \_\_\_\_\_

6)



Volume = \_\_\_\_\_

7) Find the volume of the rectangular prism with a base area of 44 square inches and a height of 20 inches.

\_\_\_\_\_

8) The height of a square prism is 25 feet. If the base area is 784 square feet, what is its volume?

\_\_\_\_\_