

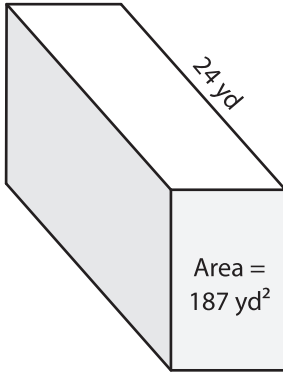
Name: _____

Volume - Prism

Integers: 53

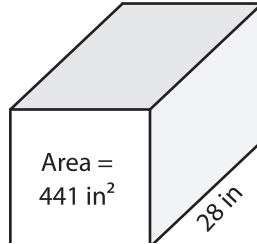
Find the volume of each shape.

1)

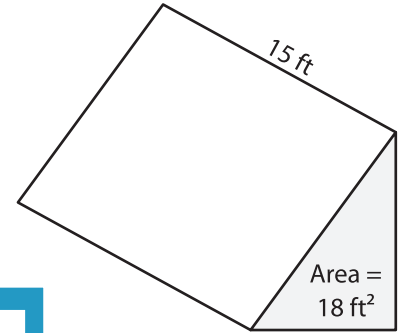


Volume = _____

2)

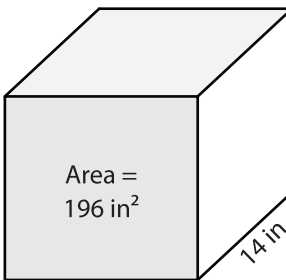


3)



Volume = _____

4)



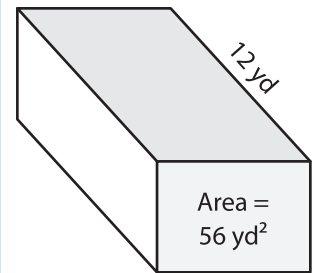
Volume = _____

PREVIEW
Gain complete access to the largest collection of worksheets in all subjects!

Members, please log in to download this worksheet.

Not a member? Please sign up to gain complete access.

www.mathworksheets4kids.com



Volume = _____

7) The base area of a square

is 27 yards.

8) The height of a triangular prism is 29 feet. If the base area is 130 square feet, what is its volume?