

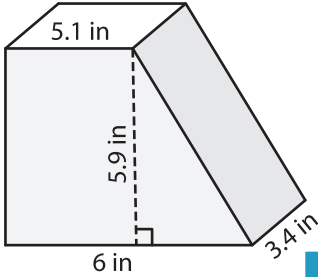
Name: _____

Volume - Prism

Mixed Review: L1DS1

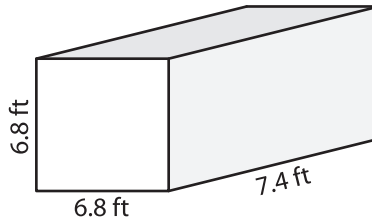
Find the volume of each shape. Round your answer to two decimal places.

1)

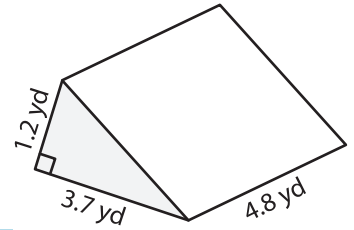


Volume = _____

2)

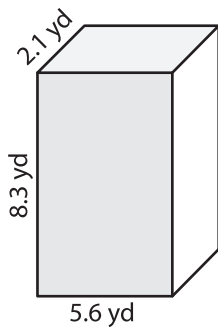


3)



Volume = _____

4)



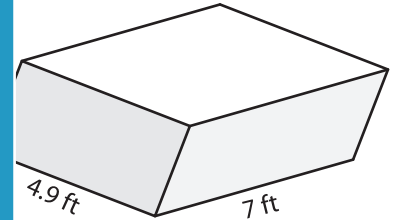
Volume = _____

PREVIEW
Gain complete access to the largest collection of worksheets in all subjects!

Members, please log in to download this worksheet.

Not a member? Please sign up to gain complete access.

www.mathworksheets4kids.com



Volume = _____

7) Find the volume of a rectangular prism with a length of 5 yards, a width of 6.5 yards and a height of 3.3 yards respectively.

5 yards, 6.5 yards and 3.3 yards

8) The base of a prism is a triangle whose base and height are 7.2 feet and 9.1 feet respectively. If the length of the prism is 2.3 feet, determine its volume. Round your answer to two decimal places.
