

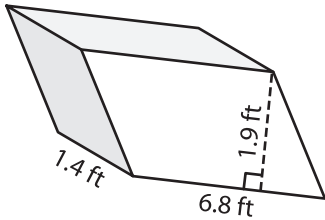
Name: _____

Volume - Prism

Mixed Review: L1DS2

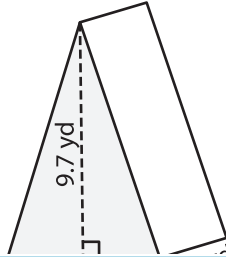
Find the volume of each shape. Round your answer to two decimal places.

1)

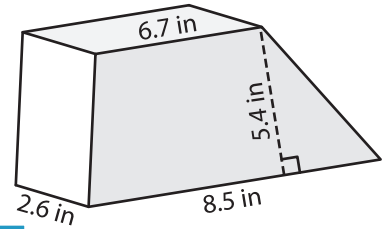


Volume = _____

2)

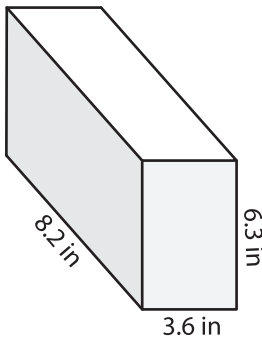


3)



Volume = _____

4)



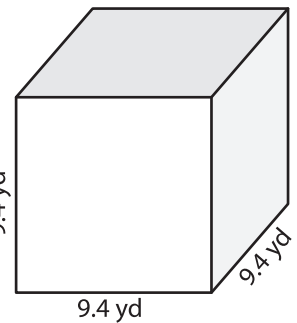
Volume = _____

PREVIEW
Gain complete access to the largest collection of worksheets in all subjects!

Members, please log in to download this worksheet.

Not a member? Please sign up to gain complete access.

www.mathworksheets4kids.com



Volume = _____

7) The base of a prism is a trapezoid with a top base of 4.5 inches, a bottom base of 7.5 inches, and a height of 3.9 inches. The length of the prism is 3.9 inches.

Find the volume of the prism. Round your answer to two decimal places.

8) The base of a prism is a parallelogram whose base and height are 8 yards and 6.9 yards respectively. If the length of the prism is 4.4 yards, determine its volume.
