

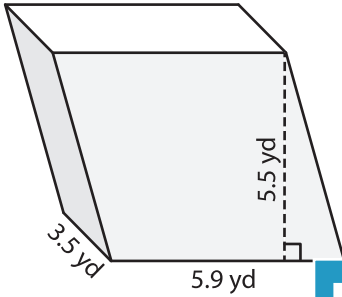
Name: _____

Volume - Prism

Mixed Review: L1DS3

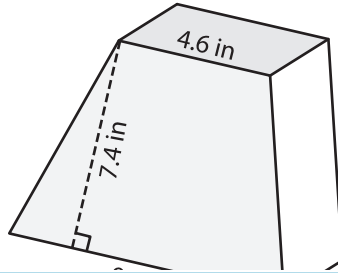
Find the volume of each shape. Round your answer to two decimal places.

1)

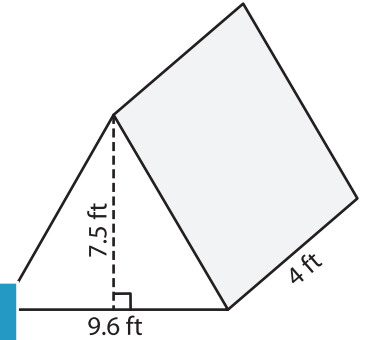


Volume = _____

2)

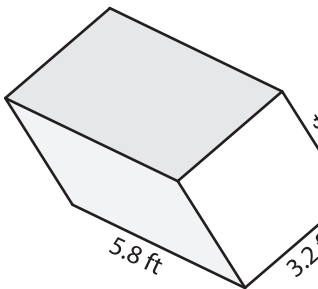


3)



Volume = _____

4)



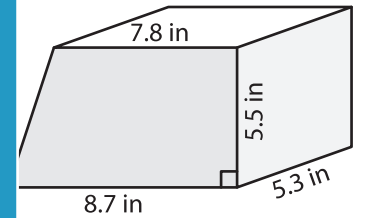
Volume = _____

PREVIEW
Gain complete access to the largest collection of worksheets in all subjects!

Members, please log in to download this worksheet.

Not a member? Please sign up to gain complete access.

www.mathworksheets4kids.com



Volume = _____

7) The base of a prism is a trapezoid with parallel bases of 1.2 feet and 2.1 feet. The distance between

the parallel bases is 5 feet. The distance between

8) The length, width and height of a rectangular prism are 9.9 inches, 6.6 inches and 7.6 inches respectively. What is its volume? Round your answer to two decimal places.
