

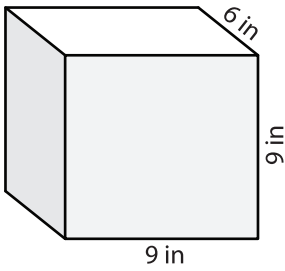
Name: _____

Volume - Prism

Mixed Review: L1ES2

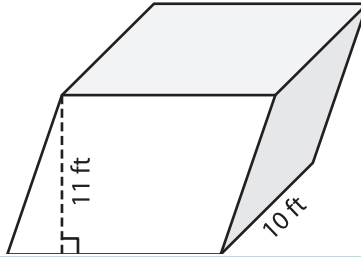
Find the volume of each shape.

1)

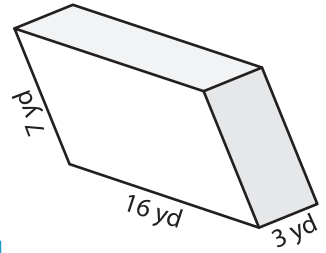


Volume = _____

2)

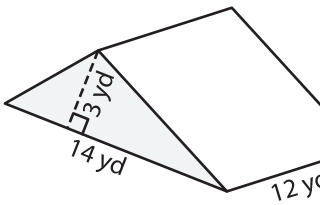


3)



Volume = _____

4)



Volume = _____

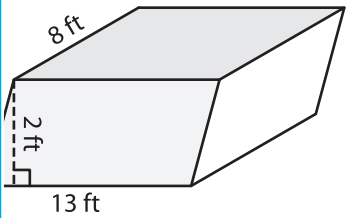
PREVIEW

Gain complete access to the largest collection of worksheets in all subjects!

Members, please log in to download this worksheet.

Not a member? Please sign up to gain complete access.

www.mathworksheets4kids.com



Volume = _____

7) The base of a prism is a triangle with a base of 14 yd and a height of 3 yd. The length of the prism is 12 yd. Find the volume of the prism if its

length is 8 ft and its height is 2 ft respectively. Determine the

8) The base of a prism is a parallelogram whose base and height are 13 inches and 5 inches respectively. Find the volume of the prism if its length is 3 inches.
