

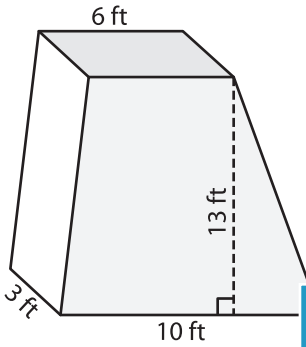
Name: _____

Volume - Prism

Mixed Review: L1ES3

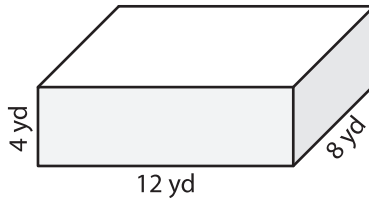
Find the volume of each shape.

1)

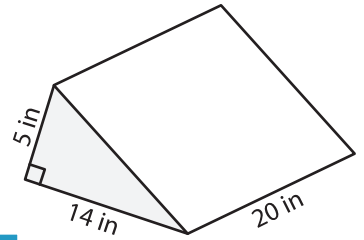


Volume = _____

2)

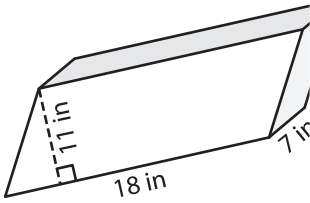


3)



Volume = _____

4)



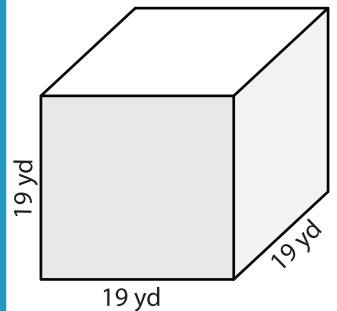
Volume = _____

Gain complete access to the largest collection of worksheets in all subjects!

Members, please log in to download this worksheet.

Not a member? Please sign up to gain complete access.

www.mathworksheets4kids.com



Volume = _____

7) The base of a prism is a trapezoid with parallel sides of 15 yards and 14 yards. If the height of the trapezoid measure

8) A rectangular prism has a length of 10 feet, a width of 7 feet and a height of 17 feet. What is the volume of the prism?
