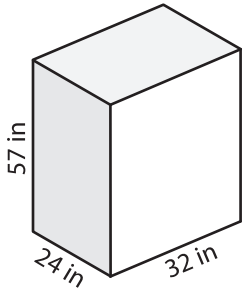


Name: _____

Volume - Prism

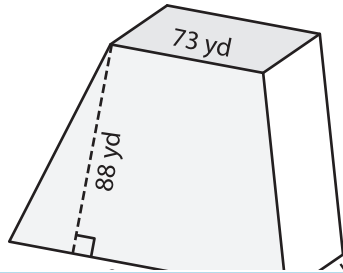
Find the volume of each shape.

1)

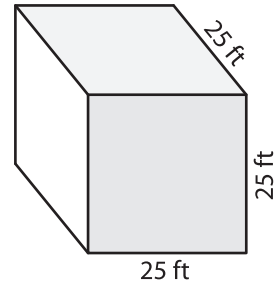


Volume = _____

2)

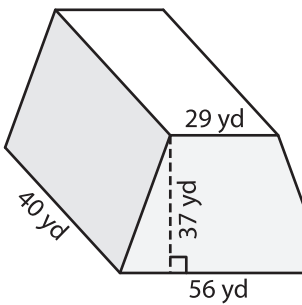


3)



Volume = _____

4)



Volume = _____

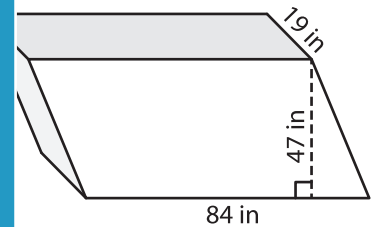
PREVIEW

Gain complete access to the largest collection of worksheets in all subjects!

Members, please log in to download this worksheet.

Not a member? Please sign up to gain complete access.

www.mathworksheets4kids.com



Volume = _____

7) The base of a prism is a parallelogram with a base of 40 feet and a height of 37 feet. Determine the volume of the prism if its length is 29 feet.

40 feet respectively.

8) The base of a prism is a triangle whose base and height are 32 inches and 29 inches respectively. Find the volume of the prism if its length is 27 inches.
