

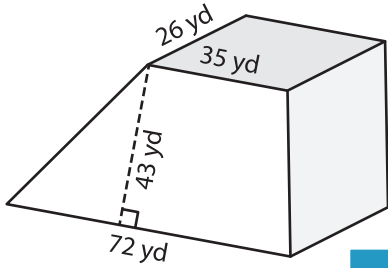
Name: \_\_\_\_\_

## Volume - Prism

Mixed Review: L1MS3

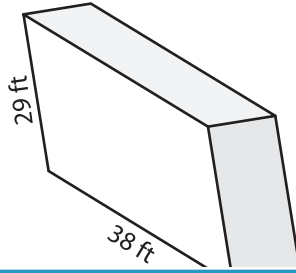
Find the volume of each shape.

1)

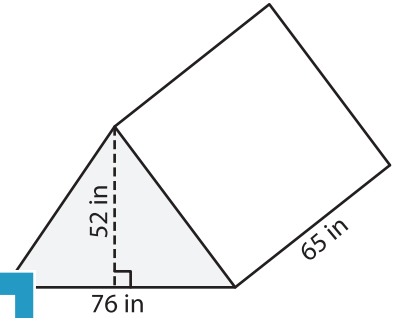


Volume = \_\_\_\_\_

2)

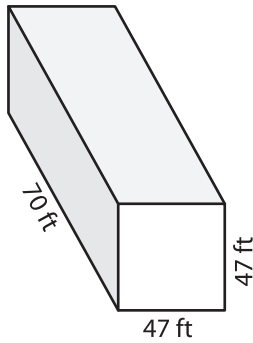


3)



Volume = \_\_\_\_\_

4)



Volume = \_\_\_\_\_

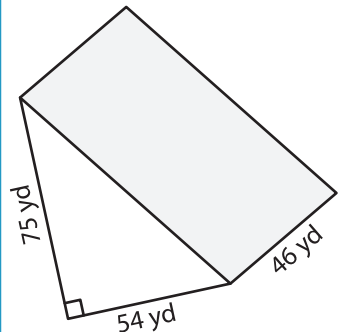
**PREVIEW**

Gain complete access to the largest collection of worksheets in all subjects!

Members, please log in to download this worksheet.

Not a member? Please sign up to gain complete access.

[www.mathworksheets4kids.com](http://www.mathworksheets4kids.com)



Volume = \_\_\_\_\_

7) A rectangular prism has a length of 45 yards. What is the volume of the prism?

\_\_\_\_\_

8) The base of a prism is a parallelogram whose base and height are 80 feet and 30 feet respectively. Determine the volume of the prism if its length is 19 feet.

\_\_\_\_\_