

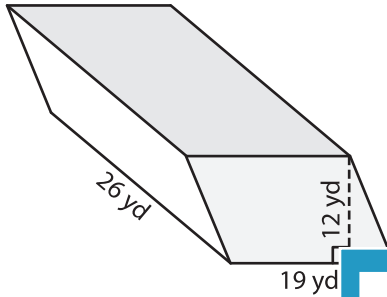
Name: \_\_\_\_\_

## Volume - Prism

Mixed Review: L2S3


A) Find the volume of each prism.

1)

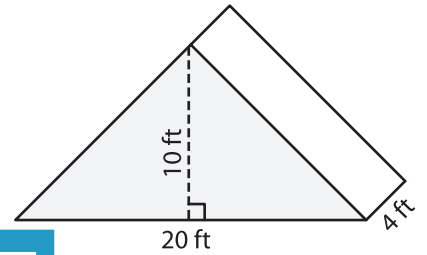


Volume = \_\_\_\_\_

2)



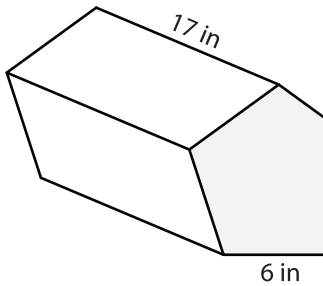
3)



Volume = \_\_\_\_\_

B) Find the volume of each prism.

4)



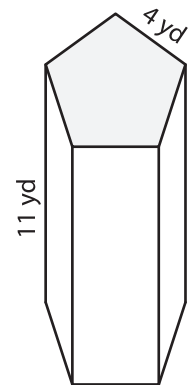
Volume = \_\_\_\_\_

Gain complete access to the largest collection of worksheets in all subjects!

Members, please log in to download this worksheet.

Not a member? Please sign up to gain complete access.

[www.mathworksheets4kids.com](http://www.mathworksheets4kids.com)



Volume = \_\_\_\_\_

7) Determine the volume of the regular hexagonal prism with a base side length of 15 inches and a height of 25 inches. Round your answer to two decimal places.

\_\_\_\_\_