

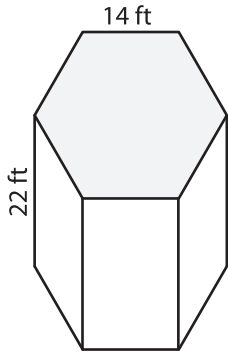
Name: _____

Volume - Prism

L2S2

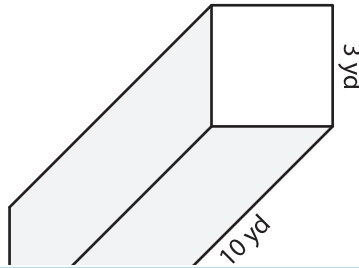
A) Find the volume of each regular prism. Round your answer to two decimal places.

1)

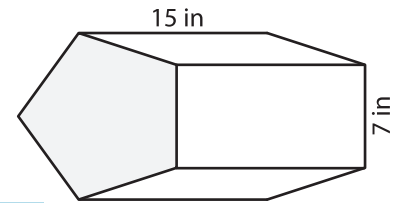


Volume = _____

2)



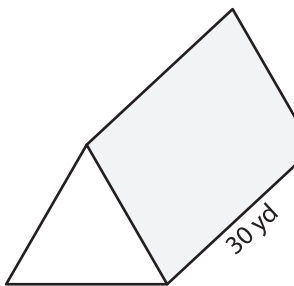
3)



Volume = _____

B) Find the volume of each regular prism. Round your answer to two decimal places.

4) Perimeter = 63 yd



Volume = _____

PREVIEW
Gain complete access to the largest collection of worksheets in all subjects!

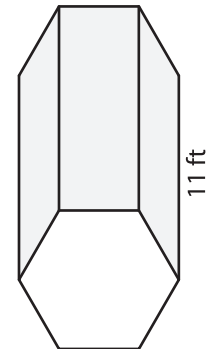
Members, please log in to download this worksheet.

Not a member? Please sign up to gain complete access.

www.mathworksheets4kids.com

Volume = _____

Perimeter = 108 ft



Volume = _____

C) Determine the volume of the regular pentagonal prism with a base side length of 16 feet and a height of 25 feet. Round your answer to two decimal places.
