

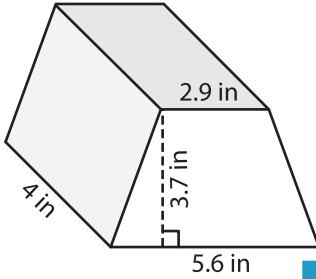
Name: _____

Volume - Prism

Decimals: S1

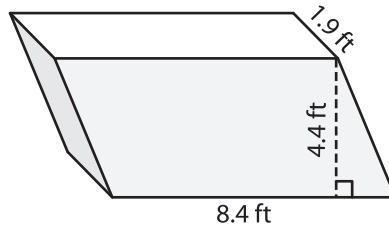
Find the volume of each shape. Round your answer to two decimal places.

1)

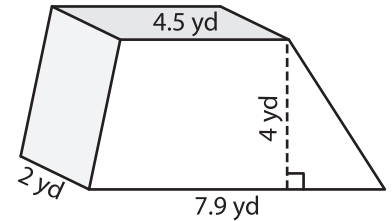


Volume = _____

2)

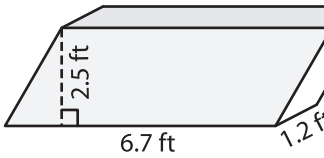


3)



Volume = _____

4)



Volume = _____

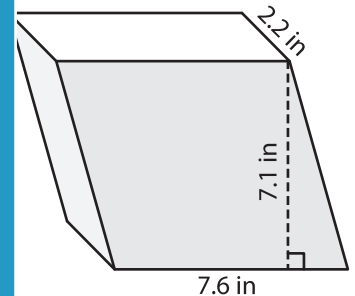
PREVIEW

Gain complete access to the largest collection of worksheets in all subjects!

Members, please log in to download this worksheet.

Not a member? Please sign up to gain complete access.

www.mathworksheets4kids.com



Volume = _____

7) The base of a prism is a trapezoid with parallel sides of 6.7 feet and 8.7 feet. Find the volume if the height of the trapezoid measure 9.5 feet

the trapezoid measure 9.5 feet

8) The base of a prism is a parallelogram whose base and height are 7.2 yards and 5.6 yards respectively. Find the volume of the prism if its length is 4.4 yards. Round your answer to two decimal places.
