

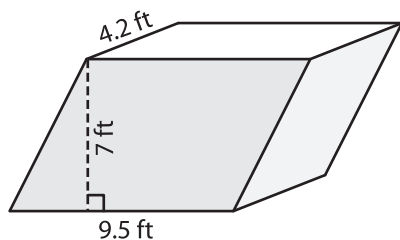
Name: _____

Volume - Prism

Decimals: S2

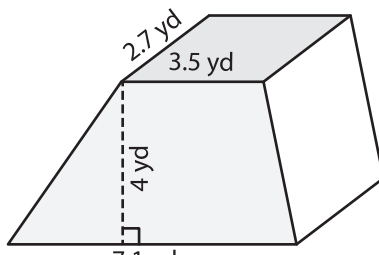
Find the volume of each shape. Round your answer to two decimal places.

1)

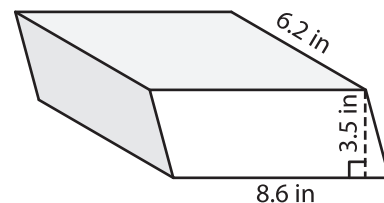


Volume = _____

2)

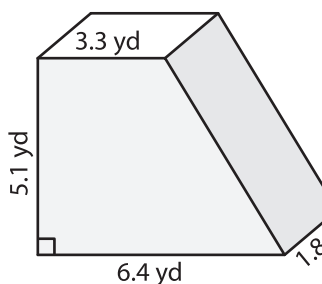


3)



Volume = _____

4)



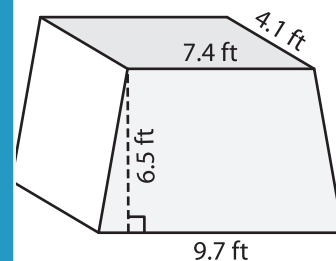
Volume = _____

PREVIEW
Gain complete access to the largest collection of worksheets in all subjects!

Members, please log in to download this worksheet.

Not a member? Please sign up to gain complete access.

www.mathworksheets4kids.com



Volume = _____

7) The base of a prism is a parallelogram with a base of 4.5 yards and a height of 2.1 yards. Find the volume of the prism if the length of the prism is 1.6 yards.

Find the volume of the prism if the length of the prism is 1.6 yards and 4.5 yards respectively.

8) The base of a prism is a trapezoid whose height is 2.1 inches. The parallel bases of the trapezoid measure 5.4 inches and 4.7 inches. If the length of the prism is 1.6 inches, find its volume. Round your answer to two decimal places.