

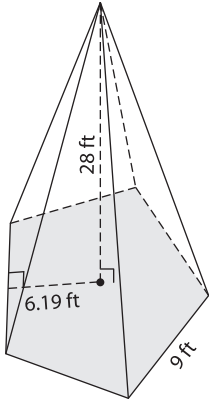
Name : _____

Volume - Pyramids

L152

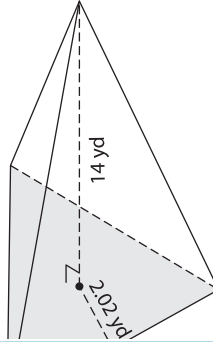
Find the volume of each regular pyramid. Round your answer to two decimal places.

1)

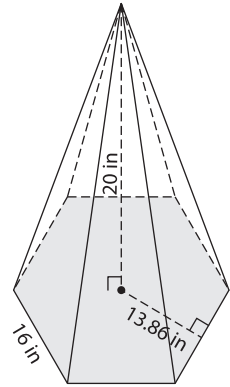


Volume = _____

2)

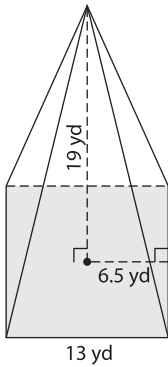


3)



Volume = _____

4)



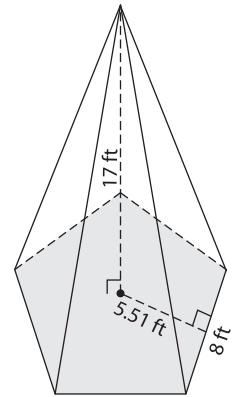
Volume = _____

PREVIEW
Gain complete access to the largest collection of worksheets in all subjects!

Members, please log in to download this worksheet.

Not a member? Please sign up to gain complete access.

www.mathworksheets4kids.com



Volume = _____

7) A regular pyramid with a base pentagon are 24 feet

height and apothem of the base of the pyramid.

8) A regular hexagonal pyramid has a height of 18 yards. The side length and apothem of the base hexagon are 15 yards and 12.99 yards respectively. Find the volume of the pyramid.
