

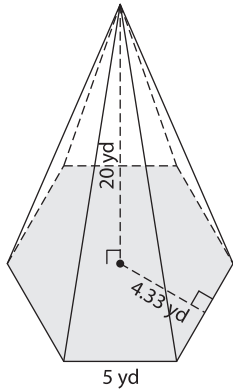
Name : _____

Volume - Pyramids

L153

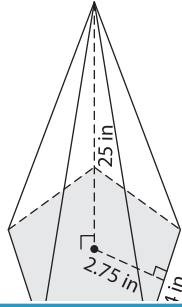
Find the volume of each regular pyramid. Round your answer to two decimal places.

1)

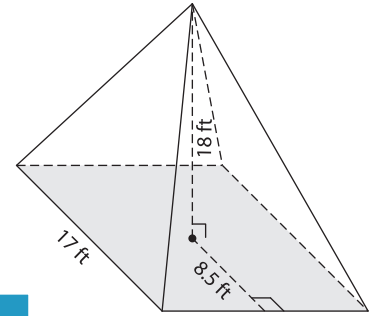


Volume = _____

2)

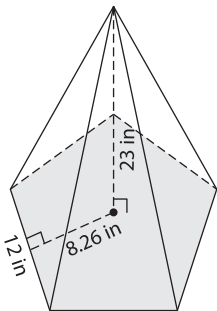


3)



Volume = _____

4)



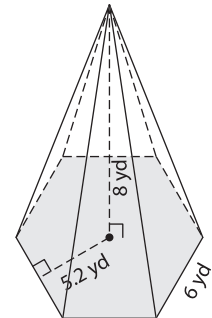
Volume = _____

PREVIEW
Gain complete access to the largest collection of worksheets in all subjects!

Members, please log in to download this worksheet.

Not a member? Please sign up to gain complete access.

www.mathworksheets4kids.com



Volume = _____

7) A regular hexagonal pyramid has a height of 19 yards and an apothem of 16.45 yards. Find the volume of the pyramid.

Find the volume of the pyramid. Use the apothem of the base hexagon.

8) A square pyramid has a height of 10 inches. The side length and apothem of the base square are 3 inches and 1.5 inches respectively. Find the volume of the pyramid.
