

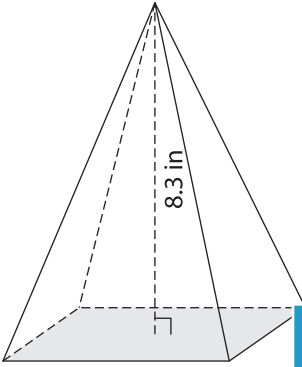
Name : _____

Volume - Pyramids

Decimals: S1

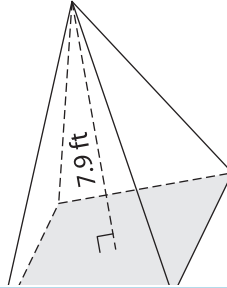
Find the volume of each pyramid. Round your answer to two decimal places.

1) Base Area = 27.07 in^2

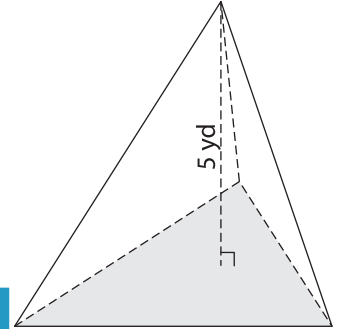


Volume = _____

2) Base Area = 38.6 ft^2

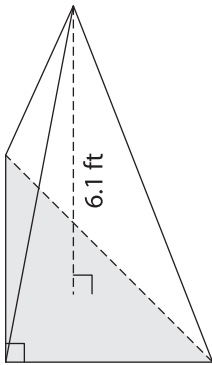


3) Base Area = 40.44 yd^2



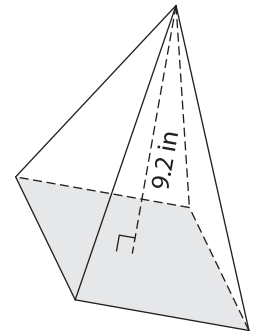
Volume = _____

4) Base Area = 10 ft^2



Volume = _____

Base Area = 73.21 in^2



Volume = _____

7) A rectangular pyramid has a base area of 100 square inches and a height of 12 inches. What is its volume? Round your answer to two decimal places.

8) Find the volume of the triangular pyramid with a base area of $64.12 \text{ square feet}$ and a height of 7.4 feet . Round your answer to two decimal places.

PREVIEW

Gain complete access to the largest collection of worksheets in all subjects!

Members, please log in to download this worksheet.

Not a member? Please sign up to gain complete access.

www.mathworksheets4kids.com