

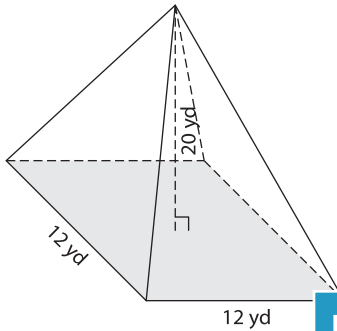
Name : \_\_\_\_\_

## Volume - Pyramids

Mixed Review: L1ES3

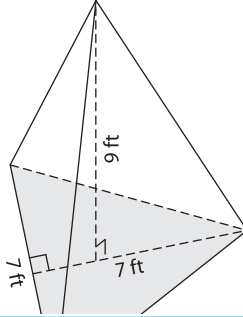
Find the volume of each pyramid. Round your answer to two decimal places.

1)

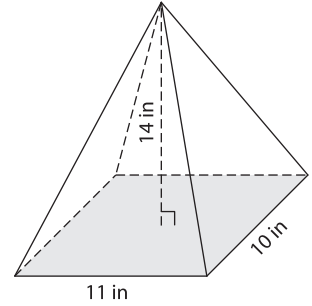


Volume = \_\_\_\_\_

2)

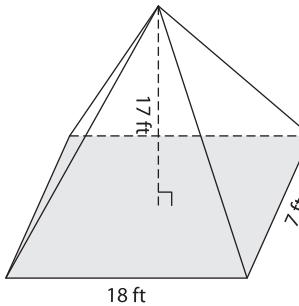


3)



Volume = \_\_\_\_\_

4)



Volume = \_\_\_\_\_

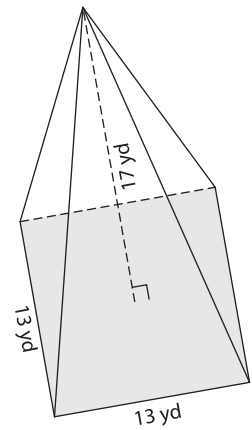
**PREVIEW**

Gain complete access to the largest collection of worksheets in all subjects!

Members, please log in to download this worksheet.

Not a member? Please sign up to gain complete access.

[www.mathworksheets4kids.com](http://www.mathworksheets4kids.com)



Volume = \_\_\_\_\_

7) The base of a pyramid is a square with a side length of 10 feet. The height of the pyramid is 12 feet. What is the volume of the pyramid?

8) A square pyramid has a height of 3 feet. Find the volume of the pyramid, if the side length of the base square is 6 feet.

\_\_\_\_\_

\_\_\_\_\_