

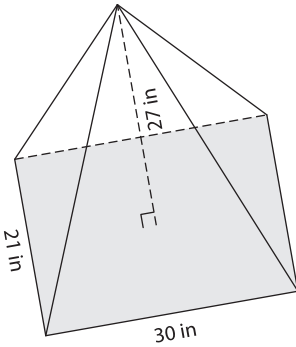
Name : \_\_\_\_\_

## Volume - Pyramids

Mixed Review: L1MS1

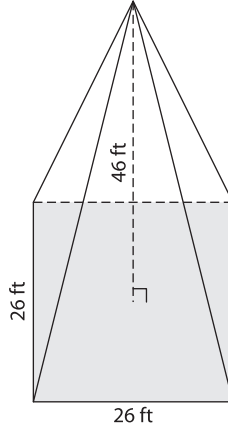
Find the volume of each pyramid. Round your answer to two decimal places.

1)



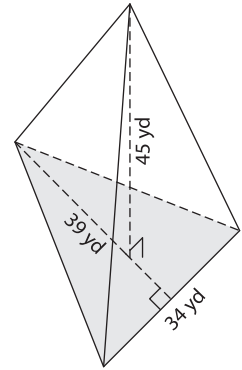
Volume = \_\_\_\_\_

2)



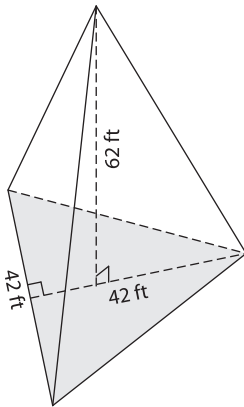
Volume = \_\_\_\_\_

3)



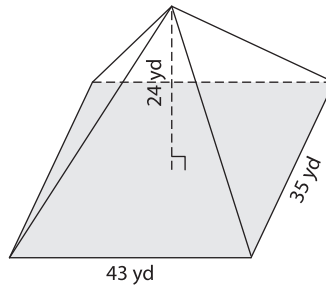
Volume = \_\_\_\_\_

4)



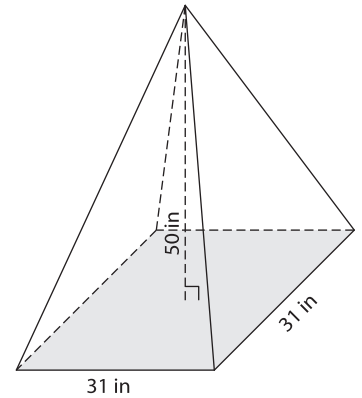
Volume = \_\_\_\_\_

5)



Volume = \_\_\_\_\_

6)



Volume = \_\_\_\_\_

7) A rectangular pyramid has a length of 32 inches, a width of 25 inches and a height of 64 inches. Determine the volume of the pyramid. Round your answer to two decimal places.

\_\_\_\_\_

8) The base of a pyramid is a triangle with a base of 23 feet and a height of 36 feet. What is the volume of the pyramid, if its height is 15 feet?

\_\_\_\_\_