

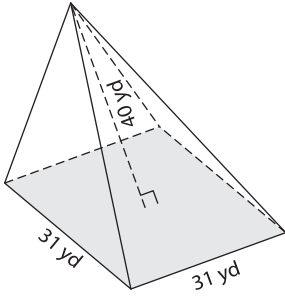
Name : \_\_\_\_\_

## Volume - Pyramids

Mixed Review: L1MS3

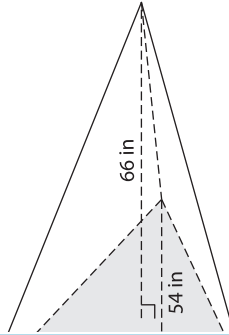
Find the volume of each pyramid. Round your answer to two decimal places.

1)

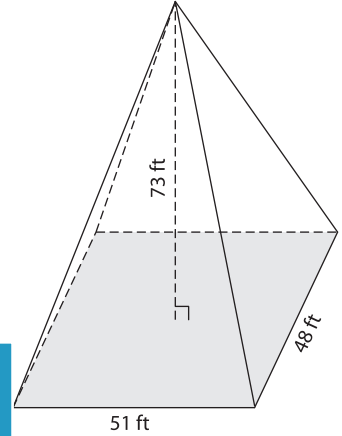


Volume = \_\_\_\_\_

2)

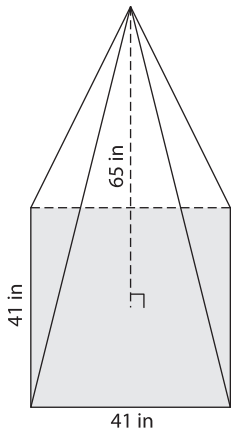


3)



Volume = \_\_\_\_\_

4)



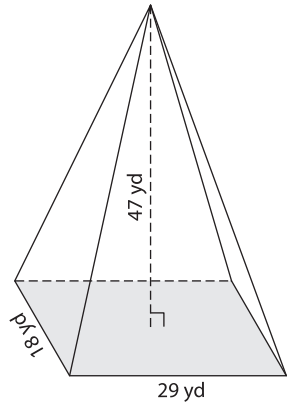
Volume = \_\_\_\_\_

**PREVIEW**  
Gain complete access to the largest collection of worksheets in all subjects!

Members, please log in to download this worksheet.

Not a member? Please sign up to gain complete access.

[www.mathworksheets4kids.com](http://www.mathworksheets4kids.com)



Volume = \_\_\_\_\_

7) The base of a pyramid is a square with a side length of 54 inches. Find the volume of the pyramid, if its height is 54 inches.

8) Find the volume of the pyramid.

\_\_\_\_\_

8) A square pyramid has a height of 61 inches. If the side length of the base square is 31 inches, find the volume of the pyramid. Round your answer to two decimal places.

\_\_\_\_\_