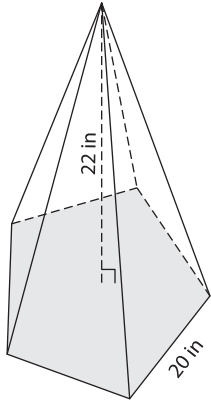


Name : _____

Volume - Pyramids

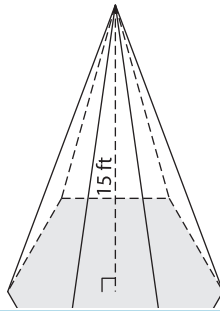
A) Find the volume of each regular pyramid. Round your answer to two decimal places.

1)

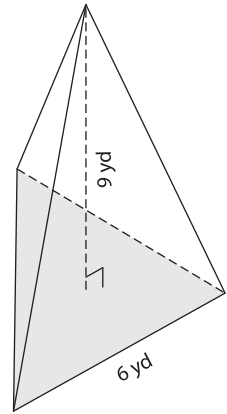


Volume = _____

2)



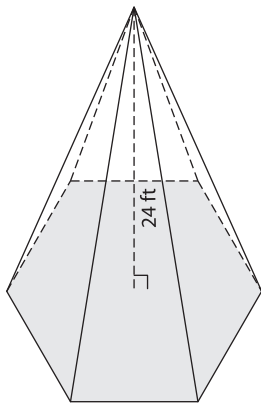
3)



Volume = _____

B) Find the volume of each pyramid. Round your answer to two decimal places.

4) Perimeter = 126 ft



Volume = _____

PREVIEW

Gain complete access to the largest collection of worksheets in all subjects!

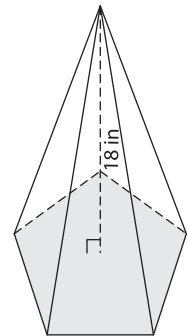
Members, please log in to download this worksheet.

Not a member? Please sign up to gain complete access.

www.mathworksheets4kids.com

Volume = _____

Perimeter = 25 in



Volume = _____

C) A square pyramid has a height of 16 feet. If the side length of the base square is 28 feet, find the volume of the pyramid. Round your answer to two decimal places.
