

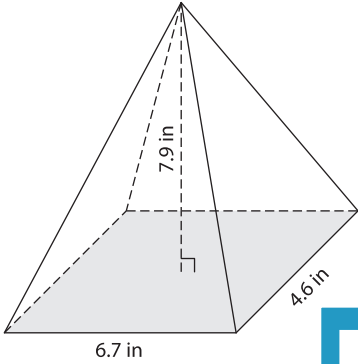
Name : \_\_\_\_\_

## Volume - Pyramids

Mixed Review: L1DS3

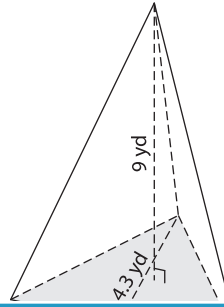
Find the volume of each pyramid. Round your answer to two decimal places.

1)

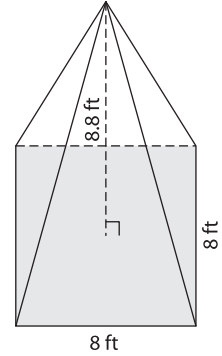


Volume = \_\_\_\_\_

2)

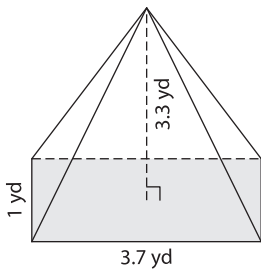


3)



Volume = \_\_\_\_\_

4)



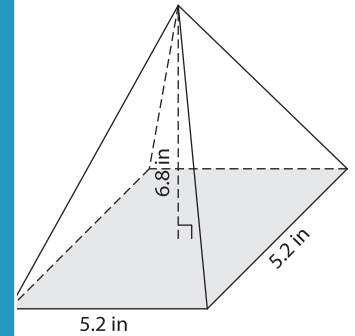
Volume = \_\_\_\_\_

**PREVIEW**  
Gain complete access to the largest collection of worksheets in all subjects!

Members, please log in to download this worksheet.

Not a member? Please sign up to gain complete access.

[www.mathworksheets4kids.com](http://www.mathworksheets4kids.com)



Volume = \_\_\_\_\_

7) The length, width and height of a pyramid are 5.2 inches, 4.1 inches and 4.1 inches respectively. Determine the volume of the pyramid. Round your answer to two decimal places.

\_\_\_\_\_

8) A square pyramid has a height of 5.5 yards. If the side length of the base square is 2.9 yards, what is the volume of the pyramid? Round your answer to two decimal places.

\_\_\_\_\_