

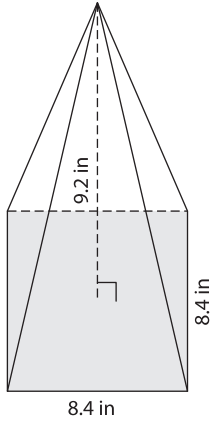
Name : _____

Volume - Pyramids

Mixed Review: L2S1

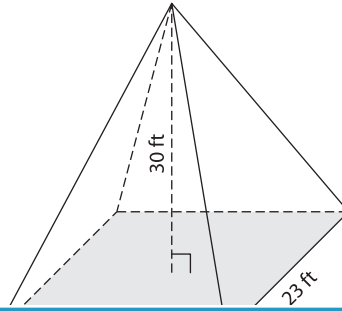
A) Find the volume of each pyramid. Round your answer to two decimal places.

1)

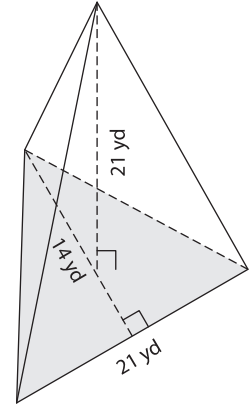


Volume = _____

2)



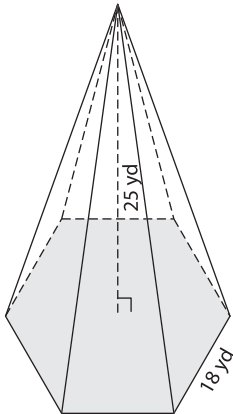
3)



Volume = _____

B) Find the volume of each

4)



Volume = _____

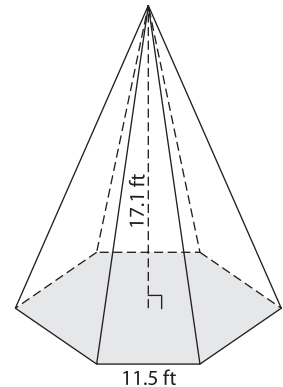
Gain complete access to the largest collection of worksheets in all subjects!

Members, please log in to download this worksheet.

Not a member? Please sign up to gain complete access.

www.mathworksheets4kids.com

Round your answer to two decimal places.



Volume = _____

7) The base of a pyramid is a triangle whose base is 13 feet and height is 25 feet. Find the volume of the pyramid, if its height is 5 feet. Round your answer to two decimal places.
