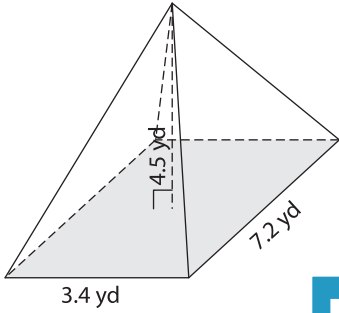


Name : _____

Volume - Cones and Pyramids

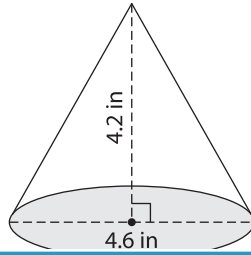
Find the volume of each shape. Round your answer to two decimal places. (use $\pi = 3.14$)

1)



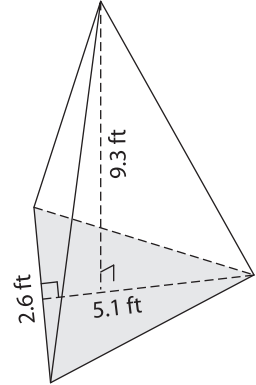
Volume = _____

2)

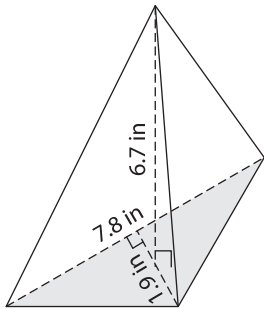


Volume = _____

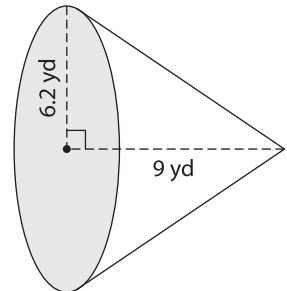
3)



4)



Volume = _____



Volume = _____

7) Find the volume of a rectangular prism with a length of 6.8 inches and width is 0.7 inches.

PREVIEW

Gain complete access to the largest collection of worksheets in all subjects!

Members, please log in to download this worksheet.

Not a member? Please sign up to gain complete access.

www.mathworksheets4kids.com

8) The base of a pyramid is a triangle with a base of 6.5 feet and a height of 4.8 feet. If the height of the pyramid is 8.6 feet, determine its volume.
