

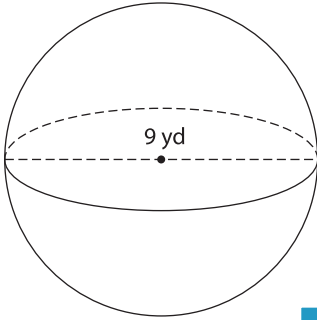
Name : _____

Decimals: L2S3

Volume - Mixed shapes

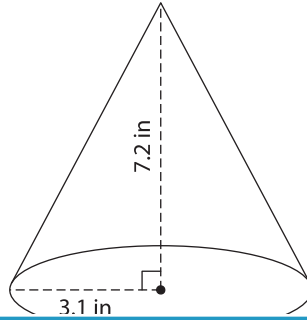
Find the volume of each shape. Round your answer to two decimal places. (use $\pi = 3.14$)

1)

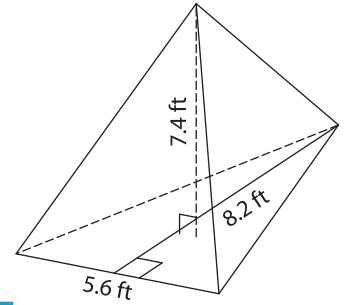


Volume = _____

2)

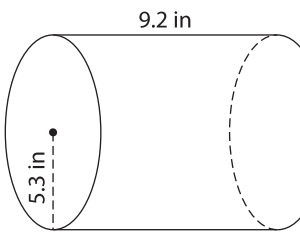


3)



Volume = _____

4)



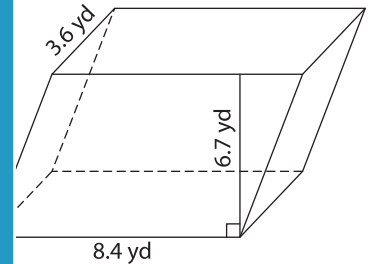
Volume = _____

Gain complete access to the largest collection of worksheets in all subjects!

Members, please log in to download this worksheet.

Not a member? Please sign up to gain complete access.

www.mathworksheets4kids.com



Volume = _____

7) The base of a prism is a trapezoid with parallel sides of 7.6 yards and 9.2 yards. If the height of the trapezoid measure

ume.

8) The diameter of a cylinder is 9.2 inches and height is 9.7 inches. Find the volume of the cylinder. Round your answer to two decimal places. (use $\pi = 3.14$)