

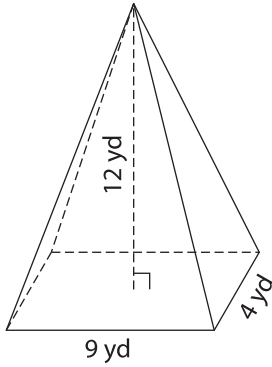
Name : \_\_\_\_\_

## Volume - Mixed Shapes

Integers: L1S2

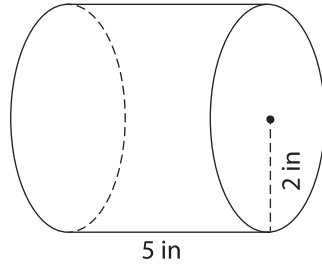
Find the volume of each shape. Round your answer to two decimal places. (use  $\pi = 3.14$ )

1)

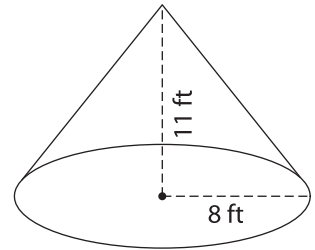


Volume = \_\_\_\_\_

2)

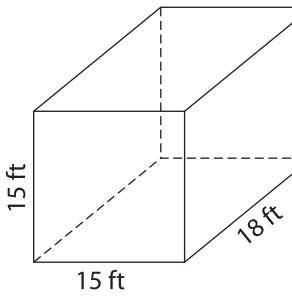


3)



Volume = \_\_\_\_\_

4)



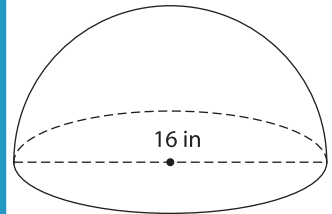
Volume = \_\_\_\_\_

**PREVIEW**  
Gain complete access to the largest collection of worksheets in all subjects!

Members, please log in to download this worksheet.

Not a member? Please sign up to gain complete access.

[www.mathworksheets4kids.com](http://www.mathworksheets4kids.com)



Volume = \_\_\_\_\_

7) The base of a prism is a triangle with a base of 10 feet, determine its volume if the length of the prism is 12 feet.

\_\_\_\_\_ of the length of the prism

8) The height of a cone is 19 inches. If the diameter of the cone is 24 inches, what is the volume of the cone? (use  $\pi = 3.14$ )